













Show each number with base-ten blocks. Write the number of hundreds, tens, and ones.




	hundreds	tens	ones
1			
234			
	_____	_____	_____

	hundreds	tens	ones
2			
300			
	_____	_____	_____

	hundreds	tens	ones
3			
209			
	_____	_____	_____

	hundreds	tens	ones
4			
145			
	_____	_____	_____

	hundreds	tens	ones
5			
266			
	_____	_____	_____


	hundreds	tens	ones
6			
159			
	_____	_____	_____



Tell how you know what to write in each column.

Write the number in the correct places of the chart.

①



350

hundreds	tens	ones

②

400

hundreds	tens	ones

③

308

hundreds	tens	ones

④

731

hundreds	tens	ones

⑤

221

hundreds	tens	ones

⑥

298

hundreds	tens	ones

⑦

469

hundreds	tens	ones



Tell how you know what number to write in each place.

Write the number of hundreds, tens, and ones. Then write the number.

1

hundreds	tens	ones
3	1	8

\_\_\_ hundreds  
\_\_\_ tens  
\_\_\_ ones =  
\_\_\_

2

hundreds	tens	ones
4	5	2

\_\_\_ hundreds  
\_\_\_ tens  
\_\_\_ ones =  
\_\_\_

3

hundreds	tens	ones
7	3	0

\_\_\_ hundreds  
\_\_\_ tens  
\_\_\_ ones =  
\_\_\_

4

hundreds	tens	ones
2	2	7

\_\_\_ hundreds  
\_\_\_ tens  
\_\_\_ ones =  
\_\_\_

5

hundreds	tens	ones
5	2	4

\_\_\_ hundreds  
\_\_\_ tens  
\_\_\_ ones =  
\_\_\_

6

hundreds	tens	ones
9	3	0

\_\_\_ hundreds  
\_\_\_ tens  
\_\_\_ ones =  
\_\_\_

7

hundreds	tens	ones
1	3	6

\_\_\_ hundreds  
\_\_\_ tens  
\_\_\_ ones =  
\_\_\_

8

hundreds	tens	ones
3	2	8

\_\_\_ hundreds  
\_\_\_ tens  
\_\_\_ ones =  
\_\_\_

9

hundreds	tens	ones
4	1	1

\_\_\_ hundreds  
\_\_\_ tens  
\_\_\_ ones =  
\_\_\_

10

hundreds	tens	ones
7	0	0

\_\_\_ hundreds  
\_\_\_ tens  
\_\_\_ ones =  
\_\_\_

11

hundreds	tens	ones
5	4	0

\_\_\_ hundreds  
\_\_\_ tens  
\_\_\_ ones =  
\_\_\_

12

hundreds	tens	ones
6	0	8

\_\_\_ hundreds  
\_\_\_ tens  
\_\_\_ ones =  
\_\_\_



Tell how you know the number of tens.



Write the number of hundreds, tens, and ones.

- ① The number 328 has

\_\_\_\_\_ hundreds

\_\_\_\_\_ tens

\_\_\_\_\_ ones

- ② The number 340 has

\_\_\_\_\_ hundreds

\_\_\_\_\_ tens

\_\_\_\_\_ ones

- ③ The number 161 has

\_\_\_\_\_ hundreds

\_\_\_\_\_ tens

\_\_\_\_\_ ones

- ④ The number 509 has

\_\_\_\_\_ hundreds

\_\_\_\_\_ tens

\_\_\_\_\_ ones

- ⑤ The number 442 has

a) Four ones, four hundreds,  
and two tens

b) Four hundreds, two tens,  
and two ones

c) Four hundreds, four tens,  
and ten ones

d) Four hundreds, four tens,  
and two ones

- ⑥ The number 671 has

a) Six hundreds, seven ones,  
and two tens

b) Seven hundreds, two tens,  
and six ones

c) Six hundreds, seven tens,  
and one one

d) Six hundreds, seven tens,  
and zero ones